

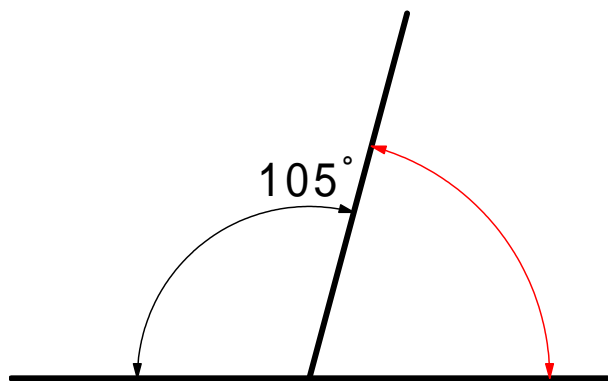
角

年 組 番

## 角の大きさのはかり方 2

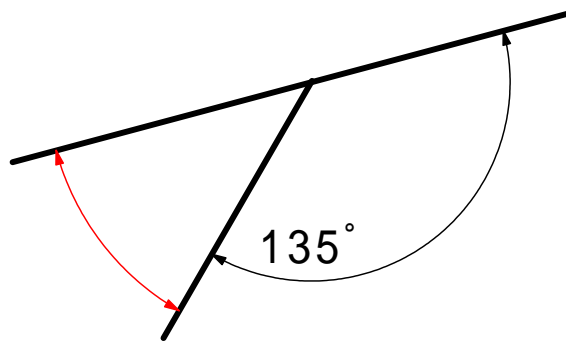
名前

 <sup>かくど</sup>の角度を計算でもとめましょう。



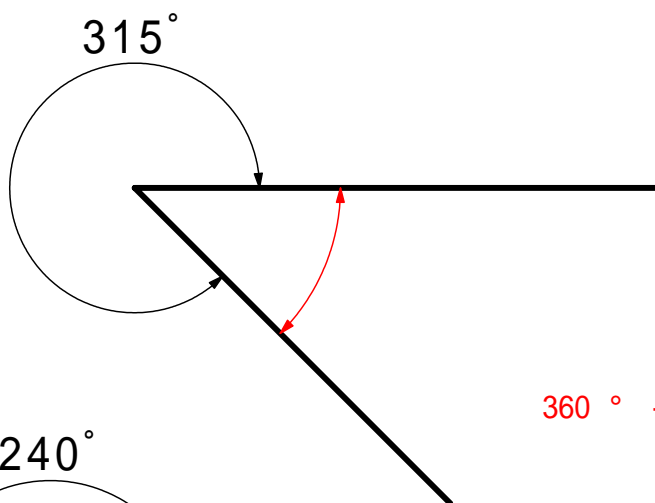
$$180^\circ - 105^\circ = 75^\circ$$

75°



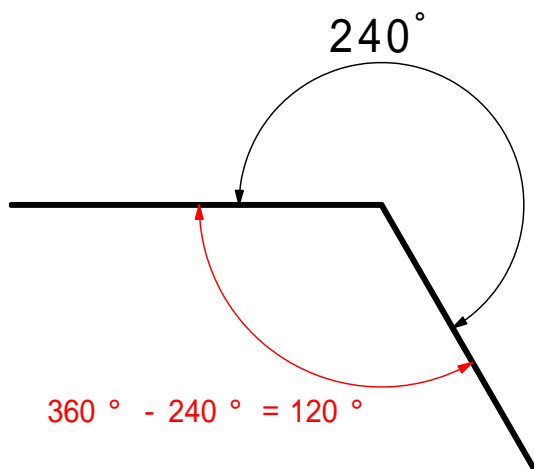
$$180^\circ - 135^\circ = 45^\circ$$

45°



$$360^\circ - 315^\circ = 45^\circ$$

45°



$$360^\circ - 240^\circ = 120^\circ$$

120°

$$180^\circ - 75^\circ = 105^\circ$$

$$180^\circ - 105^\circ = 75^\circ$$

75°

