

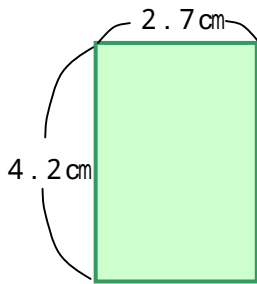
小数をかける計算

面積

年 組 番

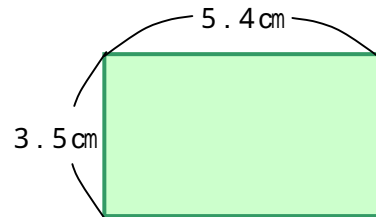
名前

1 次の長方形や正方形の面積を求めましょう。



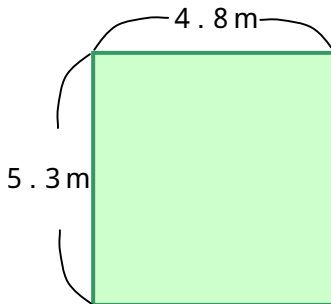
$$4.2 \times 2.7 = 11.34$$

$$\underline{11.34\text{cm}^2}$$



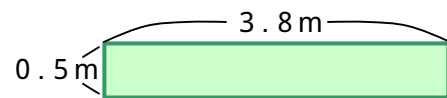
$$3.5 \times 5.4 = 18.9$$

$$\underline{18.9\text{cm}^2}$$



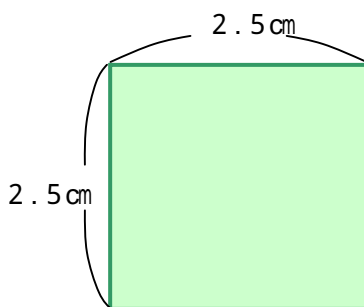
$$5.3 \times 4.8 = 25.44$$

$$\underline{25.44\text{m}^2}$$



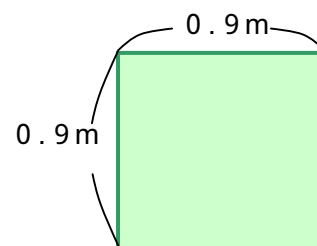
$$0.5 \times 3.8 = 1.9$$

$$\underline{1.9\text{m}^2}$$



$$2.5 \times 2.5 = 6.25$$

$$\underline{6.25\text{cm}^2}$$



$$0.9 \times 0.9 = 0.81$$

$$\underline{0.81\text{m}^2}$$

2 にあてはまる不等号を書きましょう。

$$35 \times 0.9 < 35$$

$$6.3 \times 1.02 > 6.3$$